









Minus



Minus -



Write the number in each row, then subtract, and write the difference.




 ___ ducks

 - ___ ducks walked away
 = ___ duck


 ___ ice creams

 - ___ ice cream melted away
 = ___ ice creams


 ___ elephants

 - ___ elephant walked away
 = ___ elephants


 ___ snowmen

 - ___ snowmen melted away
 = ___ snowmen


 ___ cats

 - ___ cats ran away
 = ___ cats


 ___ monkeys

 - ___ monkey ran away
 = ___ monkeys

Answers

3 ducks - 2 ducks walked away = 1 duck.

10 ice creams - 1 ice cream melted away = 9 ice creams.

9 elephants - 1 elephant walked away = 8 elephants.

8 snowmen - 5 snowmen melted away = 3 snowmen.

10 cats - 6 cats ran away = 4 cats.

4 monkeys - 1 monkey ran away = 3 monkeys.