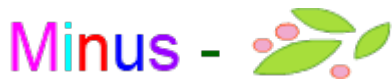




Minus



Write the number in each row, then subtract, and write the difference.



___ cats



- ___ cat ran away

= ___ cat



___ penguins



- ___ penguins hopped away

= ___ penguins



___ pandas




- ___ pandas walked away

= ___ pandas



___ sheep




- ___ sheep ran away

= ___ sheep



___ dinosaurs



- ___ dinosaurs walked away

= ___ dinosaur



___ snowmen



- ___ snowman melted away

= ___ snowman



Answers

2 cats - 1 cat ran away = 1 cat.

4 penguins - 2 penguins hopped away = 2 penguins.

5 pandas - 2 pandas walked away = 3 pandas.

5 sheep - 3 sheep ran away = 2 sheep.

4 dinosaurs - 3 dinosaurs walked away = 1 dinosaur.

2 snowmen - 1 snowman melted away = 1 snowman.