



How Many? Counting by 4, 1 to 12 groups

How many? 


Count by 4: 4 8 12 16 20 24 28 32 36 40 44 48




____ tigers




____ polar bears



____ elephants



____ pandas



____ frogs



Answers

10 problems