




## How Many? Counting by 7, 1 to 10 groups

How many?


Count by 7: 7 14 21 28 35 42 49 56 63 70




\_\_\_\_ trains



\_\_\_\_ tigers



\_\_\_\_ frogs



\_\_\_\_ toucans



\_\_\_\_ pandas



Answers

20 groups