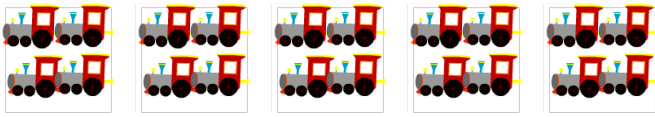




## How Many? Counting by 4, 1 to 5 groups

How many?

Count by 4: 4 8 12 16 20



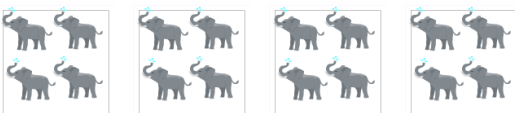
\_\_\_ trains




\_\_\_ tigers



\_\_\_ purple bugs



\_\_\_ elephants



\_\_\_ pandas



## Answers

20 people  
20 people