



Compare Number

# Fewest-Most?

Write the number in each row. Write the letter for each question.


A  \_\_\_\_\_ hawks


B  \_\_\_\_\_ owls


C \_\_\_\_\_ flamingos

Which is fewest birds? A, B, or C \_\_\_\_\_

Which is most birds? A, B, or C \_\_\_\_\_

A  \_\_\_\_\_ yellow bugs


B  \_\_\_\_\_ blue bugs


C  \_\_\_\_\_ green bugs

Which is fewest bugs? A, B, or C \_\_\_\_\_

Which is most bugs? A, B, or C \_\_\_\_\_


A \_\_\_\_\_ red cars


B  \_\_\_\_\_ yellow cars


C  \_\_\_\_\_ purple cars

Which is fewest cars? A, B, or C \_\_\_\_\_

Which is most cars? A, B, or C \_\_\_\_\_


A  \_\_\_\_\_ green butterflies


B  \_\_\_\_\_ purple butterflies

C  \_\_\_\_\_ red butterflies

Which is fewest butterflies? A, B, or C \_\_\_\_\_

Which is most butterflies? A, B, or C \_\_\_\_\_


A  \_\_\_\_\_ yellow elephants


B  \_\_\_\_\_ purple elephants


C \_\_\_\_\_ pink elephants

Which is fewest elephants? A, B, or C \_\_\_\_\_

Which is most elephants? A, B, or C \_\_\_\_\_

A  \_\_\_\_\_ green shells

B  \_\_\_\_\_ pink shells

C  \_\_\_\_\_ purple shells

Which is fewest shells? A, B, or C \_\_\_\_\_

Which is most shells? A, B, or C \_\_\_\_\_



## Answers

C: 0 flamingos is the fewest. B: 5 owls is the most.

B: 2 blue bugs is the fewest. C: 10 green bugs is the most.

A: 0 red cars is the fewest. B: 10 yellow cars is the most.

C: 2 red butterflies is the fewest. B: 12 purple butterflies is the most.

C: 0 pink elephants is the fewest. B: 4 purple elephants is the most.

C: 6 purple shells is the fewest. B: 8 pink shells is the most.