






Compare Number

Fewest-Most?

Write the number in each row. Write the letter for each question.


A 
____purple shells


B 
____orange shells


C 
____pink shells

Which is fewest shells? A, B, or C _____

Which is most shells? A, B, or C _____


A 
____red butterflies


B 
____lavendar butterfly


C 
____yellow butterflies

Which is fewest butterflies? A, B, or C _____

Which is most butterflies? A, B, or C _____


A 
____purple elephants


B 
____yellow elephants


C 
____pink elephants

Which is fewest elephants? A, B, or C _____

Which is most elephants? A, B, or C _____


A 
____yellow bugs


B 
____green bug


C 
____purple bugs

Which is fewest bugs? A, B, or C _____

Which is most bugs? A, B, or C _____


A 
____hawks


B 
____parrots


C 
____owls

Which is fewest birds? A, B, or C _____

Which is most birds? A, B, or C _____

A 
____purple cars

B 
____green car

C 
____yellow cars

Which is fewest cars? A, B, or C _____

Which is most cars? A, B, or C _____



Answers

A: 2 purple shells is the fewest. B: 10 orange shells is the most.

B: 1 lavender butterfly is the fewest. A: 11 red butterflies is the most.

C: 5 pink elephants is the fewest. A: 11 purple elephants is the most.

B: 1 green bug is the fewest. A: 7 yellow bugs is the most.

A: 3 hawks is the fewest. C: 7 owls is the most.

B: 1 green car is the fewest. C: 10 yellow cars is the most.