




Compare Number

Fewer - More? 


Write the number in each row. Write the letter for each question.


A  
 \_\_\_ pink elephants

B   
 \_\_\_ yellow elephants

Which is fewer elephants? A or B \_\_\_\_\_


Which is more elephants? A or B \_\_\_\_\_


A   
 \_\_\_ yellow shells

B   
 \_\_\_ blue shell

Which is fewer shells? A or B \_\_\_\_\_


Which is more shells? A or B \_\_\_\_\_


A   
 \_\_\_ purple butterflies

B   
 \_\_\_ yellow butterflies

Which is fewer butterflies? A or B \_\_\_\_\_


Which is more butterflies? A or B \_\_\_\_\_


A   
 \_\_\_ toucans

B   
 \_\_\_ parrots

Which is fewer birds? A or B \_\_\_\_\_


Which is more birds? A or B \_\_\_\_\_

A   
 \_\_\_ yellow cars

B   
 \_\_\_ red cars

Which is fewer cars? A or B \_\_\_\_\_

Which is more cars? A or B \_\_\_\_\_

A   
 \_\_\_ yellow bugs

B  
 \_\_\_ purple bugs

Which is fewer bugs? A or B \_\_\_\_\_

Which is more bugs? A or B \_\_\_\_\_



## Answers

A: 0 pink elephants is fewer, B: 12 yellow elephants is more

B: 1 blue shell is fewer, A: 5 yellow shells is more

A: 4 purple butterflies is fewer, B: 5 yellow butterflies is more

A: 4 toucans is fewer, B: 12 parrots is more

B: 4 red cars is fewer, A: 9 yellow cars is more

B: 0 purple bugs is fewer, A: 3 yellow bugs is more