





Compare Number

# Fewer - More?

Write the number in each row. Write the letter for each question.

A 


\_\_\_ blue shells

B 


\_\_\_ orange shells

Which is fewer shells? A or B \_\_\_\_\_

Which is more shells? A or B \_\_\_\_\_

A 


\_\_\_ green bugs

B 


\_\_\_ blue bugs

Which is fewer bugs? A or B \_\_\_\_\_

Which is more bugs? A or B \_\_\_\_\_

A 


\_\_\_ purple cars

B 


\_\_\_ yellow cars

Which is fewer cars? A or B \_\_\_\_\_

Which is more cars? A or B \_\_\_\_\_

A 


\_\_\_ yellow butterflies

B 


\_\_\_ red butterflies

Which is fewer butterflies? A or B \_\_\_\_\_

Which is more butterflies? A or B \_\_\_\_\_

A 


\_\_\_ yellow elephants

B 


\_\_\_ purple elephant

Which is fewer elephants? A or B \_\_\_\_\_

Which is more elephants? A or B \_\_\_\_\_

A 

\_\_\_ toucans

B 

\_\_\_ pelicans

Which is fewer birds? A or B \_\_\_\_\_

Which is more birds? A or B \_\_\_\_\_



## Answers

B: 7 orange shells is fewer, A: 8 blue shells is more

A: 9 green bugs is fewer, B: 10 blue bugs is more

B: 6 yellow cars is fewer, A: 9 purple cars is more

B: 4 red butterflies is fewer, A: 5 yellow butterflies is more

B: 1 purple elephant is fewer, A: 2 yellow elephants is more

B: 4 pelicans is fewer, A: 9 toucans is more