





Compare Number

# Fewer - More?


Write the number in each row. Write the letter for each question.


A   
 \_\_\_ green shells

B   
 \_\_\_ pink shells

Which is fewer shells? A or B \_\_\_\_\_


Which is more shells? A or B \_\_\_\_\_


A   
 \_\_\_ yellow cars

B   
 \_\_\_ red cars

Which is fewer cars? A or B \_\_\_\_\_


Which is more cars? A or B \_\_\_\_\_


A   
 \_\_\_ lavender butterflies

B   
 \_\_\_ yellow butterflies

Which is fewer butterflies? A or B \_\_\_\_\_


Which is more butterflies? A or B \_\_\_\_\_


A   
 \_\_\_ green bugs

B   
 \_\_\_ red bug

Which is fewer bugs? A or B \_\_\_\_\_


Which is more bugs? A or B \_\_\_\_\_


A   
 \_\_\_ pink elephants

B   
 \_\_\_ purple elephant

Which is fewer elephants? A or B \_\_\_\_\_

Which is more elephants? A or B \_\_\_\_\_

A   
 \_\_\_ owls

B   
 \_\_\_ parrot

Which is fewer birds? A or B \_\_\_\_\_

Which is more birds? A or B \_\_\_\_\_

## Answers

A: 3 green shells is fewer, B: 5 pink shells is more

B: 2 red cars is fewer, A: 4 yellow cars is more

B: 4 yellow butterflies is fewer, A: 5 lavender butterflies is more

B: 1 red bug is fewer, A: 3 green bugs is more

B: 1 purple elephant is fewer, A: 2 pink elephants is more

B: 1 parrot is fewer, A: 4 owls is more